

# SUMMATIVE ASSESSMENT – II

**TIME : 2.00Hrs.**  
**MARKS : 35**

**PAPER – 1**  
**Part - A**

**X CLASS**  
**SOCIAL STUDIES**

Answer any Five of the following Questions, Choosing at least two from each group A&B

**SECTION – 1**

**Group – A**

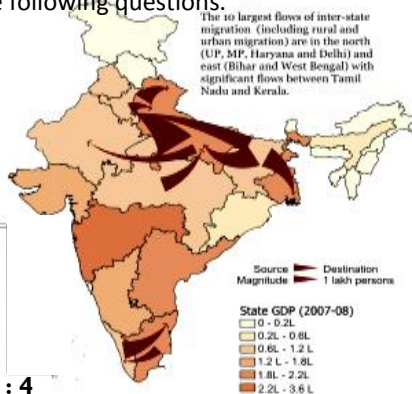
**MARKS : 10**

1. Great Himalayas are composed of snow and ice cover. Differentiate between Himalayan and peninsular rivers.
2. A rise of 2° C in average temperature would result in a rise of 1 meter in sea level. What is the impact of climate change on land?
3. An international effort to form an agreement where by all countries try to reduce their emissions of green house gas has so far not been achieved. What are the disagreement between “developed and developing countries” about AGW?
4. Suggest any four remedial measures to prevent formation of urban slums.

**Group - B**

5. How is the service sector is different from the other sectors,. Explain with some examples.
6. What do you understand by aerotropolis?
7. Why do governments try to attract more foreign investments?
8. Observe the map of India and answer the following questions.

- a. To which states Bihar rural population migrates?
- b. What could be the reasons for out migration and in migration in context to Tamilnadu.



**Answer any four of the following questions in One or Two Sentences**

**Section - II**

**MARKS : 4**

9. Write any two indicators used by multi national companies while selecting an industrial site?
10. What is infant mortality rate?
11. What is Arab Spring?
12. What is your opinion about the effects of globalisation in your locality?
13. What are the non-material things on which ever life depends?
14. What do you mean by indenture labour?

## Section - III

Answer any four of the following Questions, Choosing at least Two from each group A&B

**Group – A**

**MARKS : 16**

15. Describe efforts taken for the soil and water conservation in Hiware Bazar?
16. What consequences do you think would happen due to migration?
17. Literacy is a key factor for socio economic progress. At independence in 1947 12% of population was literate. It grew to 74.04% by 2011. However the 2011 shows that there is disparity in literacy rates for men (82.14%) and women (65.46%). How does literacy impact development.
18. What is global warming? What measures do you suggest to reduce the effect of global warming?

**Group - B**

19. What are the issues of conflict between government and people living in regions of nuclear power plant?
20. What do you understand by underdevelopment explain with an example each from urban and rural areas.
21. Describe the similarities and differences between the impact of internal and international migration.
22. **Read the following table given below and answer following questions.**

Daily Wages for different farm activities in Andhra Pradesh in December 2011 (in Rupees)

	Ploughing	Sowing	Weeding	Transplanting	Harvesting	Winnowing	Threshing	Picking
Male workers	214	197	215	-	164	168	152	-
Female Workers	-	152	130	143	126	124	118	136

- a. What are the works done by male workers?
- b. What are the works done by female workers?
- c. In which works the wages are different from male and female?
- d. What are the reasons for paying less wages to female workers than the male workers?

**Section - IV**

**23. Point out the following in INDIA Map**

**MARKS : 05**

Mark the following places on the given Indian outlined map.

23. 1. Kanya kumari    2. Pulikat lake    3. Simla    4. River Narmada
5. 82 ½ ° Eastern longitude

**Or**

24. 1. Mahanadi    2. Impal    3. Nilagiri Hills    4. Simmim    5. Rann of Kutch

# SUMMATIVE ASSESSMENT – II

Name: \_\_\_\_\_


Paper - 1

TIME : 30 Minutes.

Roll No. \_\_\_\_\_

PART – B

MARKS : 15



## I Choose the correct Answer:

20X½=10

1. From east to west India measures  
A. 3214 km    B. 2933 km    C. 7516 km    D. 5000 km    (    )
2. Pirpanjal and Mahabharata ranges form the important ranges of  
A. Greater Himalayas    B. Shivaliks  
C. Lesser Himalayas    D. None of these    (    )
3. Pulicat Lake is located between  
A. A.P. and Odisha    B. A.P and Tamilnadu  
C. Karnataka and Kerala    D. Odisha and West Bengal    (    )
4. Now India falls under the category of  
A. Middle income group    B. Low income group  
C. High income grope    D. None of these    (    )
5. The largest delta in the world is  
A. Mahanadi    B. Godavari    C. Sundarbans    D. Ganga    (    )
6. Human development report is published by  
A. WTO    B. UNDP    C. UNESCO    D. IBRD    (    )
7. The important economic activity of India is  
A. Service sector    B. Secondary sector  
C. Agriculture    D. All of these    (    )
8. According to Indian tradition seasons are divided into  
A. Three    B. four    C. five    D. six    (    )
9. Hiware Bazar is in  
A. AP    B. UP    C. Maharashtra    D. Karnataka    (    )
10. The working age is  
A. 15-59    B. 15-49    C. 18-59    D. 18-65    (    )
11. Shivaliks are also known as  
A. Mishmi hills    B. Jammu hills    C. Cachar hills    D. All of these    (    )
12. Suvarnabhoomi international airport is in  
A. Hyderabad    B. Kuala Lumpur    C. Bangkok    D. Tokyo    (    )
13. The length of Indira Gandhi canal is \_\_\_\_\_ kms  
A. 520    B. 550    C. 650    D. 600    (    )
14. The ore mined in Kudremukh is  
A. Coal    B. Manganese    C. Bauxite    D. Iron ore    (    )
15. Chipko Andolan started in the early  
A. 1960s    B. 1970s    C. 1980s    D. 1990s    (    )
16. Migrant labourers spent more on  
A. Land    B. Education    C. Food    D. None of these (    )
17. The length of coastal line of AP is  
A. 972 km    B. 872 km    C. 982 km    D. 872 km    (    )
18. One of the following places faced a severe drought during 1943-45  
A. Punjab    B. Gujarat    C. Kerala    D. Bengal    (    )
19. The density of population of India according to 2011 census  
A. 324    B. 382    C. 275    D. 340    (    )
20. The emigration of act of India is passed in  
A. 1963    B. 1973    C. 1983    D. 1993    (    )

## II. Fill in the blanks

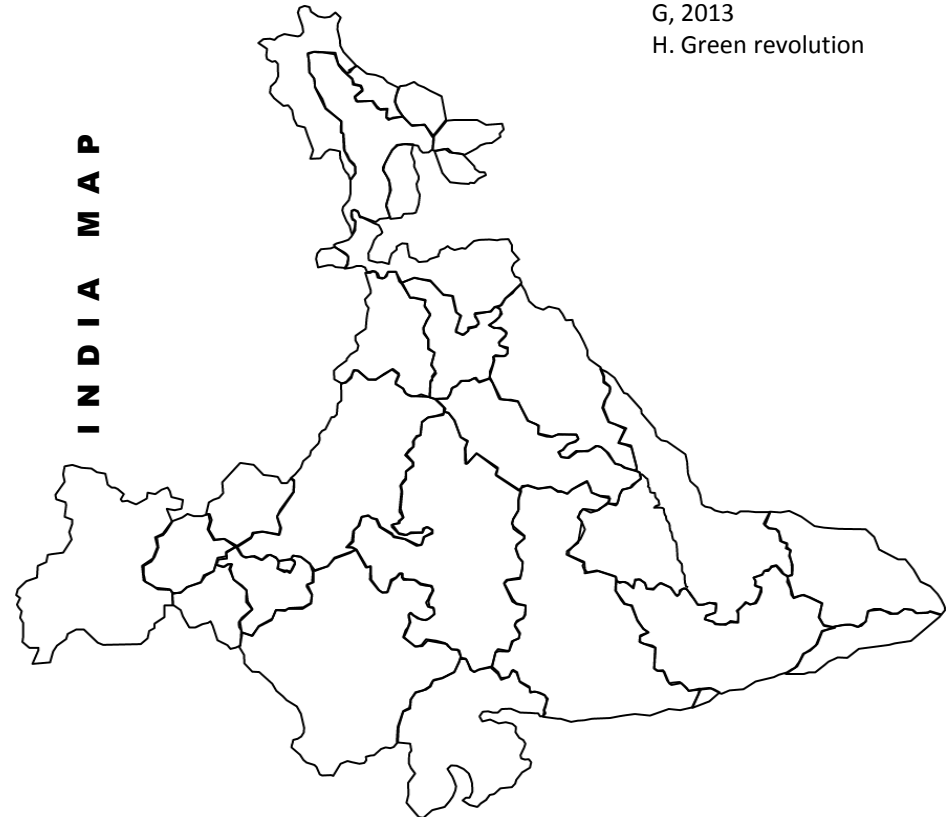
5X½=2½ M

21. Narkondam and Barren islands are \_\_\_\_\_
22. The pebble studded porous zone is called \_\_\_\_\_
23. The highest peak in eastern ghat is \_\_\_\_\_
24. Voluntary physical labour is known as \_\_\_\_\_
25. The expanded form of SEZ is \_\_\_\_\_

## III. Match the following

5X½=2½ M

- |                    |        |                     |
|--------------------|--------|---------------------|
| 26. WTO            | (    ) | A. Global warming   |
| 27. Ranbaxy        | (    ) | B. Irrigation       |
| 28 Food security   | (    ) | C. Geneva           |
| 29 Deforestation   | (    ) | D. Medicine         |
| 30. Persian wheels | (    ) | E. New York         |
|                    |        | F. 2012             |
|                    |        | G, 2013             |
|                    |        | H. Green revolution |





**Thank you**

**K. Suresh**, S.A., S.S.,

**Z.P. (Boys) High School,**

**SRIKALAHASTI**

# FOR MORE SOCIAL STUDIES

**PPTs, Videos, Previous Question Papers, Model papers, Lesson Plans, Teaching Notes, Materials, Maps.....etc., in Telugu and English Mediums of APSCERT syllabus.**



**K.  
SURESH**

**Visit**

[http://sureshsrikalahasti.weebly.com/  
gurudeva.com](http://sureshsrikalahasti.weebly.com/gurudeva.com) - new

[http://mana social.weebly.com](http://mana-social.weebly.com)

<https://www.youtube.com/user/1973shekar>

<https://www.youtube.com/user/kunaatisuresh>