



# NIGERIA



## AN AFRICAN COUNTRY

7<sup>th</sup> class - English Medium  
prepared as per CCE MODEL





**K. Suresh-9441775926,  
GURUDEVA.COM**

**7<sup>th</sup> class  
English  
Medium  
prepared  
as per  
CCE  
MODEL**

A world map showing the continents of Europe, Africa, Asia, and Australia. The continent of Africa is highlighted in a solid red color. The word "AFRICA" is written in large, red, capital letters to the left of the continent. To the right of the continent, the Telugu word "ఆఫ్రికా" (Afrika) is written in red. The map includes outlines of major landmasses and some smaller islands.

AFRICA

ఆఫ్రికా


















الجزائر

ليبيا

المحيط  
الغربي

موريتانيا

Mali

Niger

تشاد  
Tchad

Niamey

Burkina  
Faso

Kano

نجامينا  
N'Djamena

Sénégal

Bamako

Guinée-Bissau

Conakry

Guinée

Freetown

Sierra  
Leone

Liberia

Côte  
d'Ivoire

Abidjan

Ghana

Kumasi

Accra

Togo

Lomé

Bénin

Ibadan

Lagos

Nigeria

Cameroun

Douala

Yaoundé

République  
Centrafricaine

Gulf of  
Guinea

Equatorial  
Guinea

São Tomé  
& Príncipe

Libreville

Gabon

Congo









Bénin

Nigeria

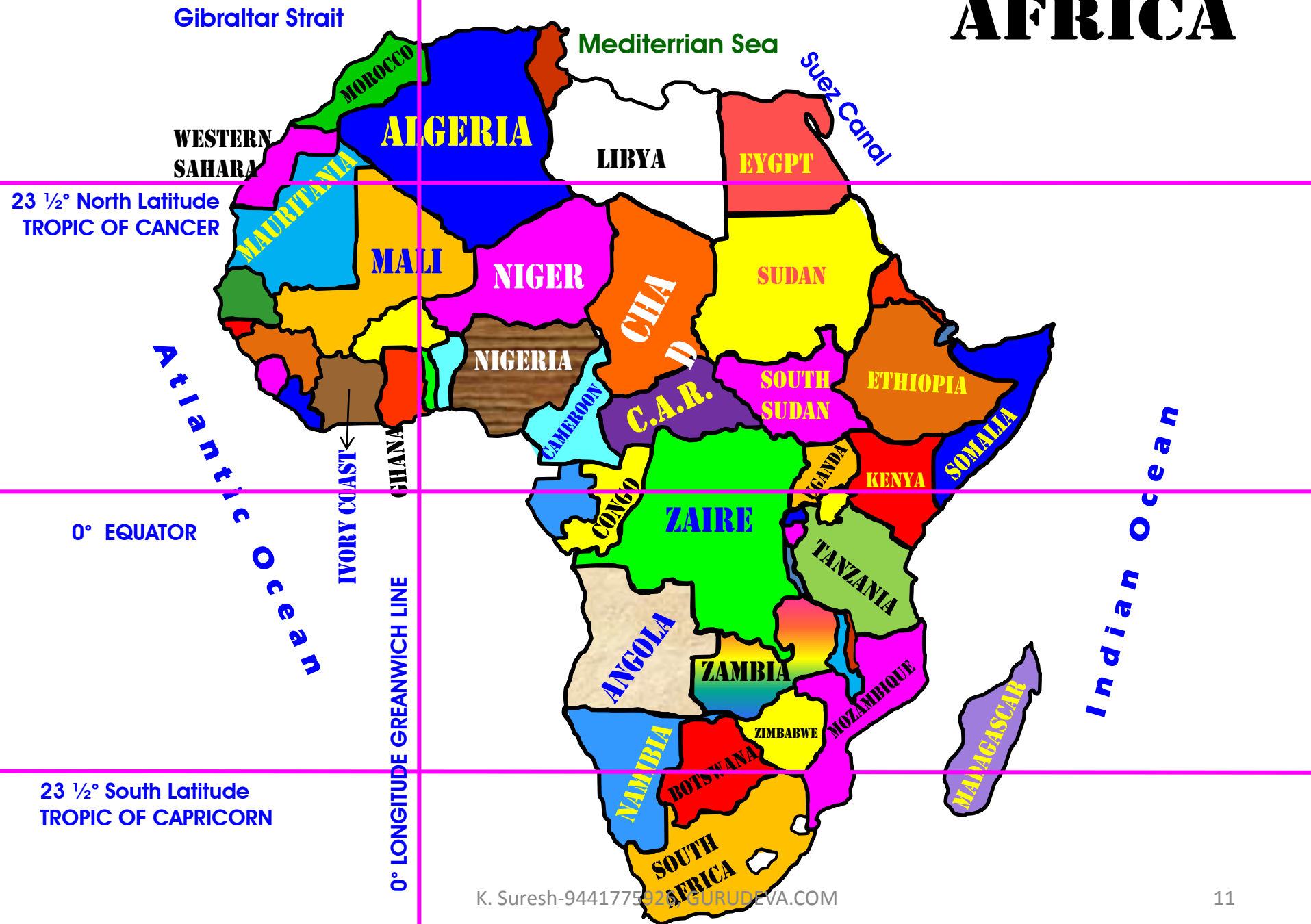
Ca







# AFRICA







**Nigeria  
is a  
country  
on the  
western  
side of  
Africa.**







**Nigeria, like India was a colony of Britain  
and became independent after a long  
period of struggle.**



**Thus both Nigeria and India share much in common. Locate Nigeria on the map and see if we also have similar climate.**



**1. Locate  
Nigeria  
on a  
map of  
Africa.**





Find out the  
name of the  
ocean which  
is to the  
South.



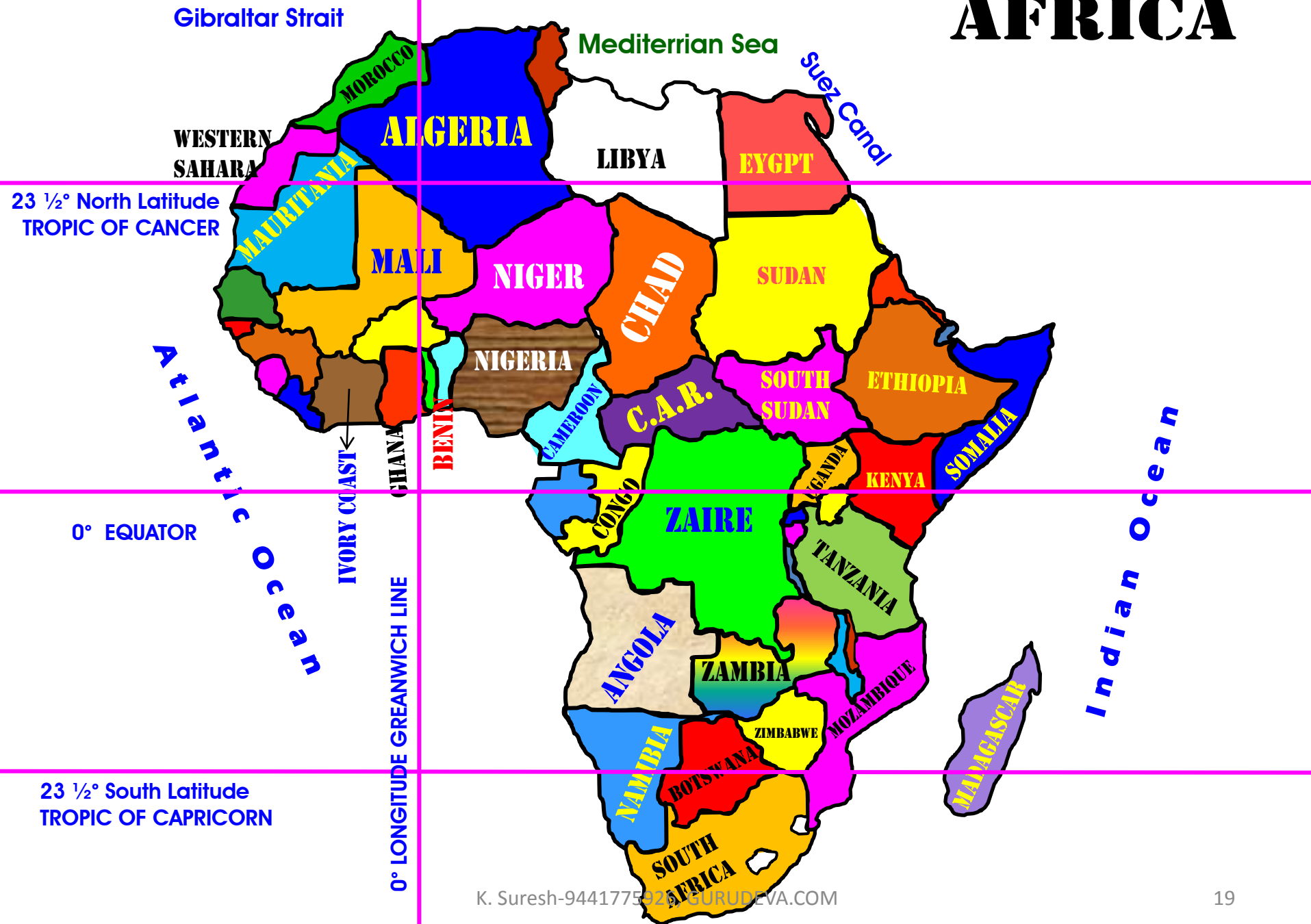




**Find out the names of the countries that are situated on the other three sides of Nigeria.**



# AFRICA







Mali

A F R I C A

Niger

Chad

Burkina  
Faso

Benin

**NIGERIA**

Togo

Ghana

Central  
African  
Republic

Cameroon

Equatorial Guinea →

São Tomé

**A. There are 4 countries that are situated on the other three sides of Nigeria.**

**They are**

**1. West : Benin**

**2. North : Niger**

**3. North East : Chad**

**4. South East : Cameroon**

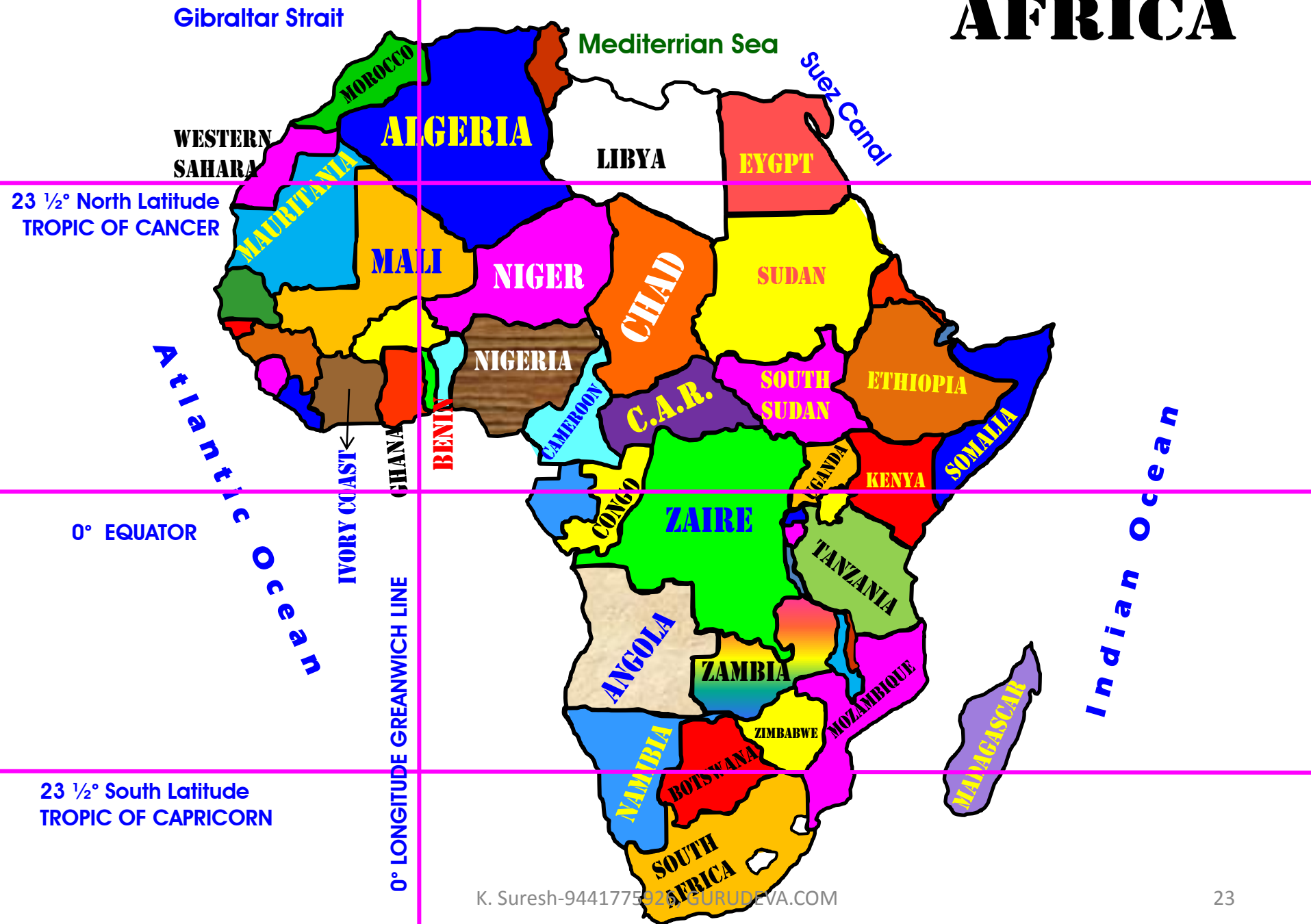




**Also find out which part of  
Nigeria is nearest to the  
Equator. What kind of  
climate do you think those  
regions will have?**



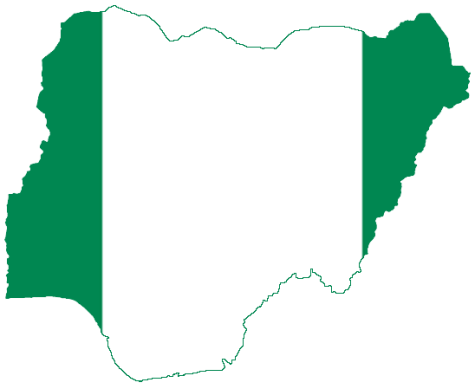
# AFRICA





**A.1. Southern part of  
Nigeria is nearest to  
the Equator.**

**2. Tropical equatorial  
climate have the  
Nigeria region.**

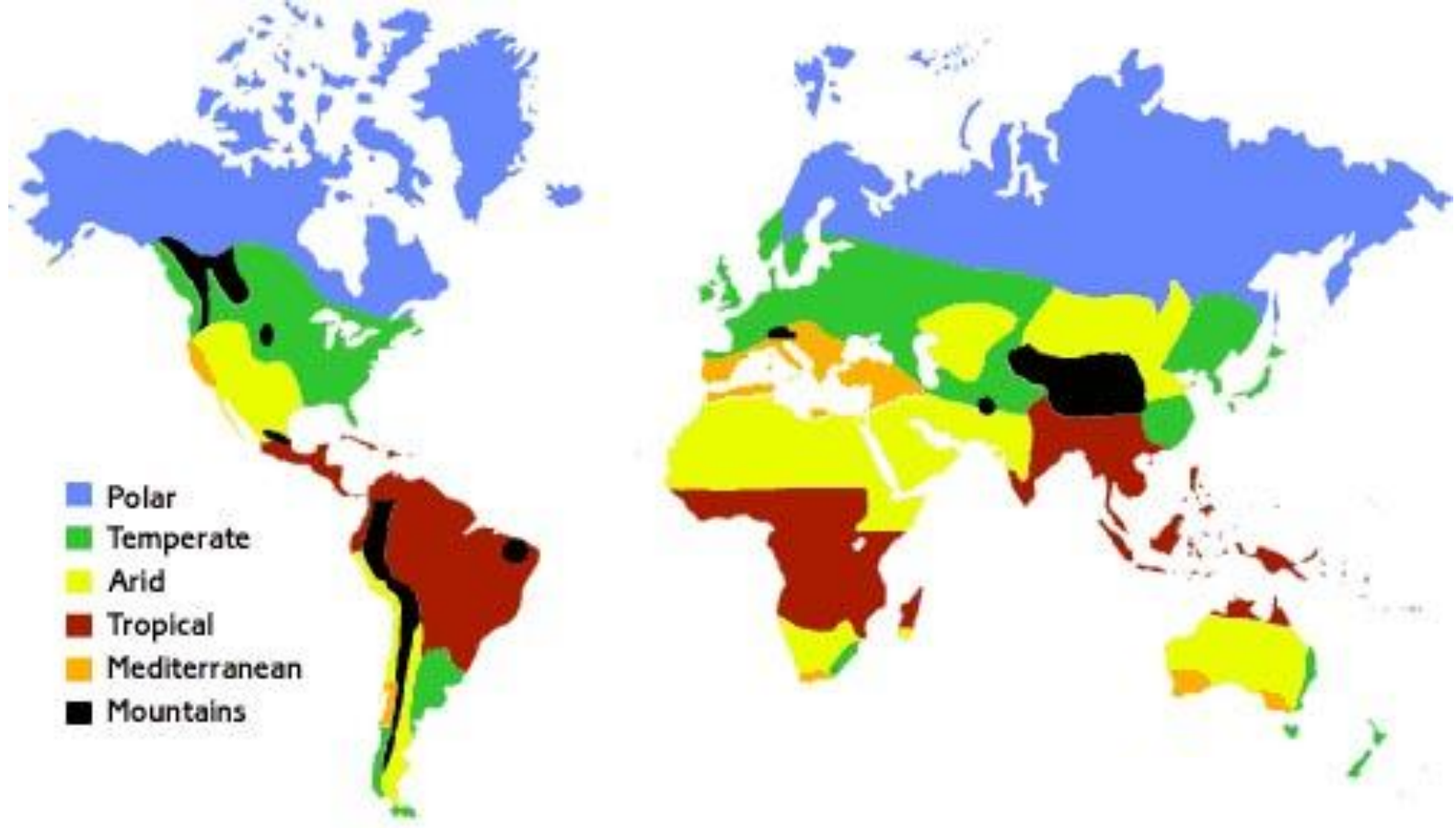


# Nigeria

# Seasons







**The Southern region of Nigeria which is near the Equator has equatorial climate, that is, it has only one season throughout the year — it is fairly warm and rainy all through the year.**



**The Southern region of Nigeria which is near the Equator has equatorial climate, that is, it has only one season throughout the year — it is warm and rainy all through the year.**







The capital city of Nigeria, Lagos, is situated in this region.



**This gives rise to dense forests  
along the sea coast.**

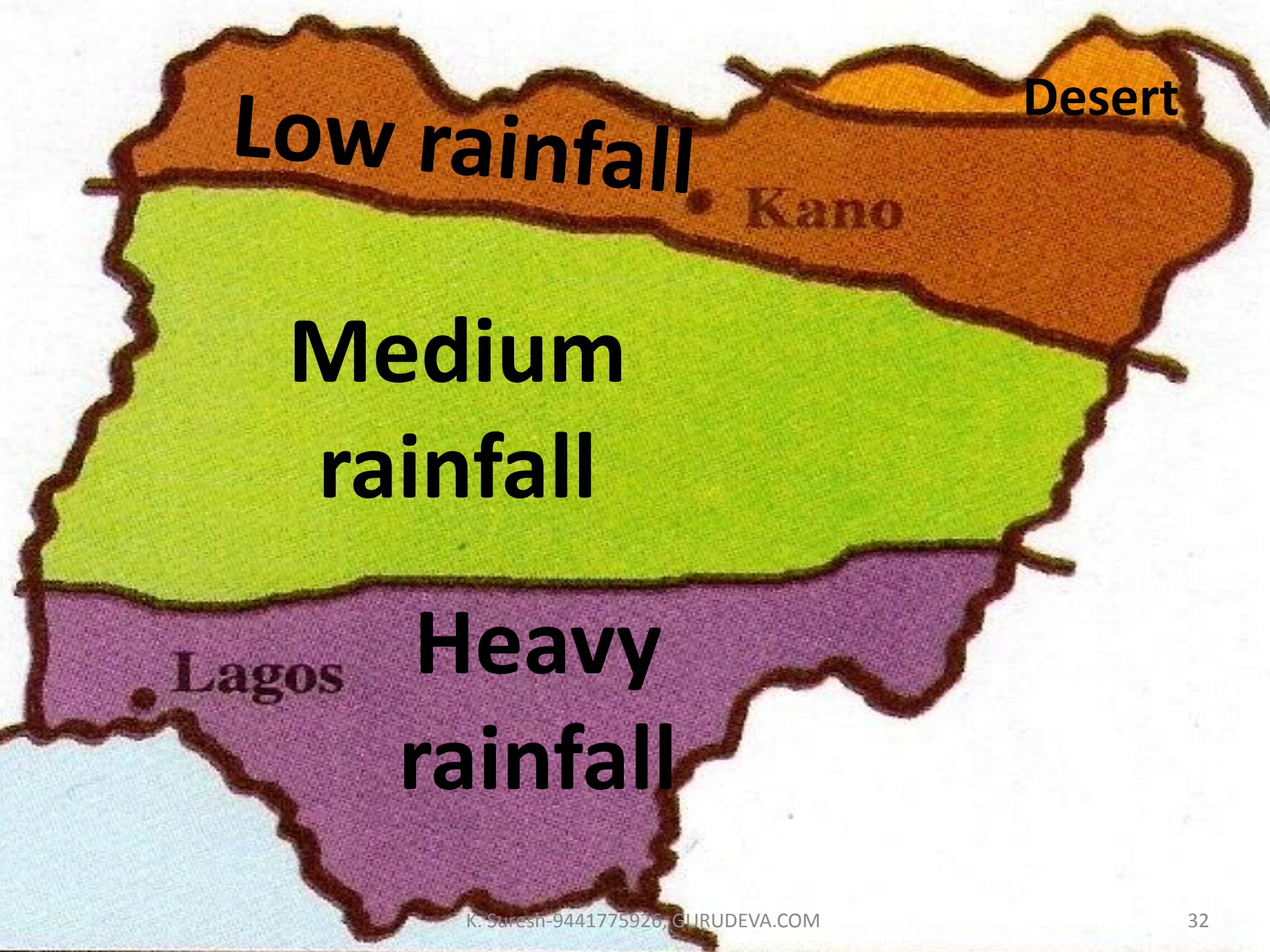












**Low rainfall**

**Desert**

**Kano**

**Medium  
rainfall**

**Lagos**

**Heavy  
rainfall**





**However, only Southern Nigeria has equatorial climate.**



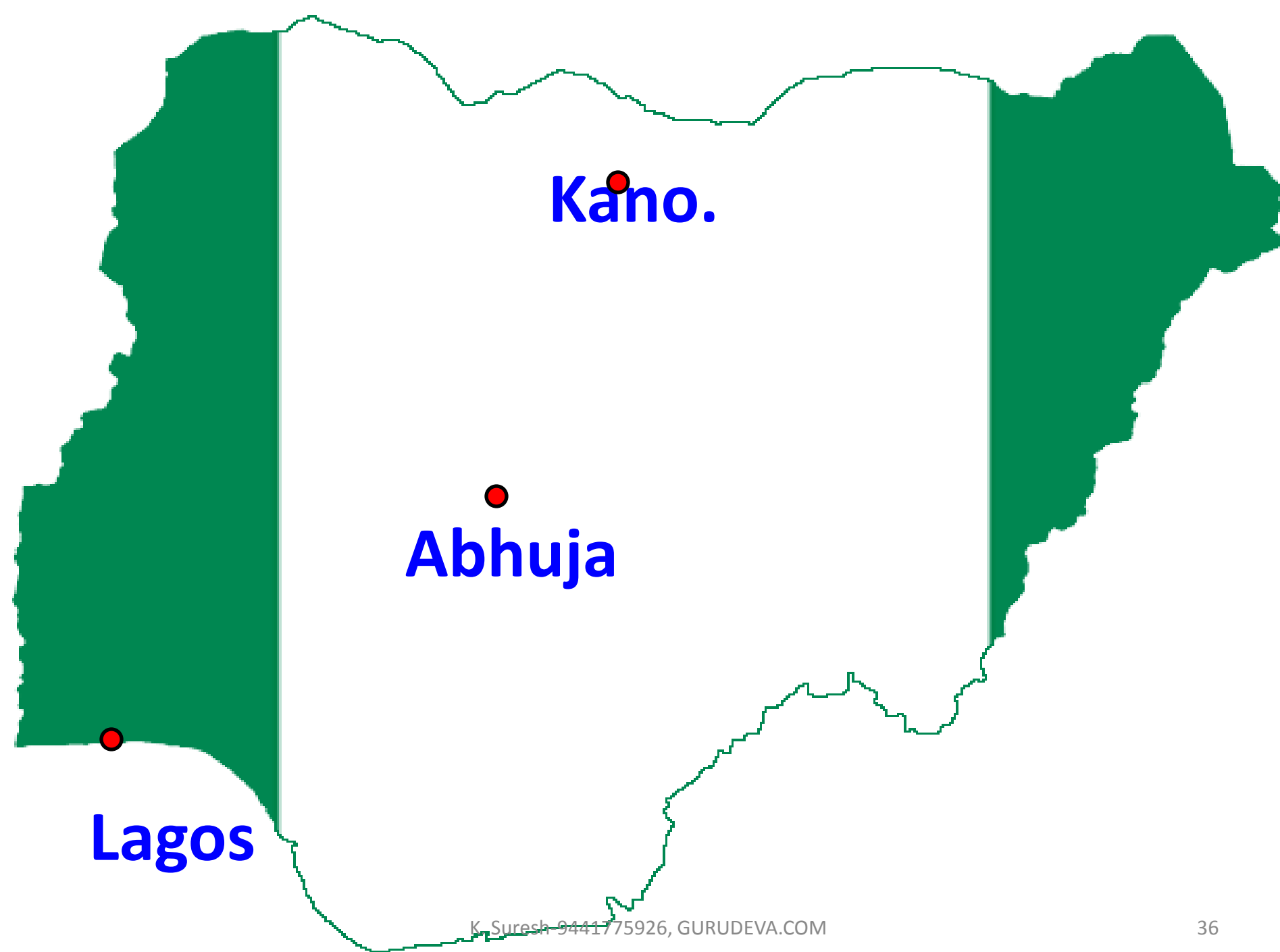
**Northern parts of Nigeria have a mild winter season also. And it rains only from May to October. It does not rain all the year round like it does in Lagos.**



- Look at the rainfall map of Nigeria. Locate the cities of Lagos and Kano.









• Which city is near the equator and which one is farther away?

0° EQUATOR



**Kano.**

**Lagos**

• Lagos city is near the equator and Kano city is farther away

**0° EQUATOR**



# LAGOS

# LAGOS





# LAGOS





# City of LAGOS

Main urban areas, lagoon, harbour and port

10 km



*Lagos Murtala  
Muhammed  
Airport*



Oshodi-  
Isolo

Mushin

Shomolu

Lagos  
Mainland

Surulere

Ajegunle

*Apapa Port*

*Tin Can  
Island Port*

Apapa

Lagos  
Island

Ikoyi

Victoria Is.

*Badagry Creek*


*Lagos Harbour*

*Lagos Lagoon*

*Atlantic Ocean*



# LAGOS



# KANO







**NIGERIA**

● **Kano**



Kano

Jos

Abuja

NIGERIA

Lagos

CAMEROON

Guinea



# KANO





# KANO





# KANO

*Fig 8.1 Flat roofs of Kano*





- Which part of Nigeria gets maximum rainfall?



# Southern part of Nigeria gets maximum rainfall







- Which part gets less rainfall?



- Northern part gets less rainfall

# End of Part -1