

D 016
DISTRICT COMMON EXAMINATION BOARD
PRE-FINAL EXAMINATIONS - MARCH - 2015
SOCIAL STUDIES - Paper - I
(English Medium)
PART - A

Class : X]

(Max. Marks : 35)

[Time : 2 Hrs.

SECTION - I (Marks : 10)

Note : Answer any FIVE of the following questions, choosing atleast two from each group A & B.

Group - A

1. Define perennial rivers ? How they very important for the development of agriculture ?
2. "You are unable or unwilling to appreciate that in nuclear energy we are confronted not only with an immense power, but also an incredible potential for destruction. We want our coast and country protected from the radioactive peril. Stop the project. Look to renewable energy as an alternative."

Question : Comment on "Problems with the establishment of Nuclear Power Plant and on fear of people."

3. Today this is the major source of water for people. When there is so much extraction it affects others in connected areas. It affects the stock of water that would be available for future generations.

Question : What is the consumption pattern of ground water at present". Give your opinion.

4. What are the activities of unorganised sector and what is the share raising from it ?

Group - B

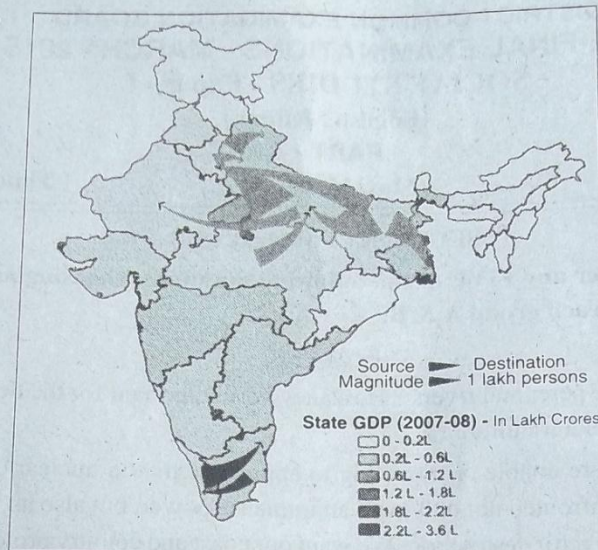
5. Explain the concept "Special Economic Zones".
6. What are the 'necessary actions to remove the disparities in land distribution' in the village of Rampur ?
7. What are the suggestions are made to solve the problems arising in the consumption of River water ?

[Turn Over

D 016

2

8.



- 1) In South India, Mostly migrations are occurring in between what states ?
- 2) What are important factors to migrate towards Delhi ?

SECTION - II (Marks : 4)

Note : Answer any **FOUR** of the following questions.

9. Define Average Income ? What is measurement using to calculate it ?
10. "In GDP Industrial, service sector share is 75%, But these sectors are creating employment only 50% in the total labour."

Question : What are the important factors are influencing most labours depending on agriculture ?

11. What are Peninsular Rivers ? Give examples.
12. Define 'Brand' ?
13. How 'Master Plan' helps for the development of city ?
14. How does 'Migration act of 1983' supervises the international Migrations ?

[Contd ... 3rd

D 016

3

SECTION - III (Marks : 16)

Note : Answer any FOUR of the following questions, choosing atleast two from each group A & B.

Group - A

15. How does human activities are causes for Global warming. Give a detailed explanation.

16. **Read the following para and answer the following questions.**

There are two groups of Islands - Andaman and Nicobar Islands stretched in Bay of Bengal and Lakshadweep Islands in the Arabian Sea. Andaman and Nicobar Islands is an elevated portion of submerged mountain parts running from Myanmar Mountain Arkan Yoma. In Andaman and Nicobar Islands, Narkondam and Barren islands are volcanic origin. The southernmost tip of India is found in Nicobar Island and called as Indira point which was submerged during the 2004 Tsunami. Lakshadweep Islands are of coral origin. Its total geographic area is 32 sq.kms. This group of island is famous for great variety of flora and fauna.

- 1) What is the area of Lakshadweep Islands ?
- 2) "Indian Island group are extended in" ? Where ?
- 3) Upto 2004, what is extreme land of India ?
- 4) Give a very brief note on the expansion of Andaman Nicobar Islands.

17. What are the problems will arise with 'Gender disparity' ? What are suggestions you give to reduce it ?

18. What are favourable factors for the expansion of employment opportunities in Industrial, service sectors ?

Group - B

19. By the encourage of "Small scale industrial product" in villages, how we will reduce unemployment explain.

20. Give important Nutrisions with examples and how they are important for the body health ?


[Turn Over

D 016

4

21. "The promotion urbanisation not only the increase of opportunities, and economic activities to the people."

Question : Give a critical explanation on the concept of "Development achieved with help of urbanisation."



1. "Where is most of poverty shown in the pyramid diagram".
2. Give a one sentenced answer for "imbalances of Income."
3. Show the ratio of "Rich and Poor" with the source of diagram.
4. Most of Income occuring to GDP from which sector ?

SECTION - IV (Marks : 5)

23. Mark the following concepts on India outline.

- A) 1) Rajastan 2) Vijayawada 3) River Narmada
4) One Metropolitan City 5) Kanchanjunga Peak

(Or)

- B) 1) Cape Camorin 2) $82^{\circ} 32'$ East Longitude
3) River Luni 4) Mahadev Hills
5) Indira Gandhi International Airport

Regd. No.

D 016 (A)

Marks :

**DISTRICT COMMON EXAMINATION BOARD
PRE-FINAL EXAMINATIONS - MARCH - 2015
SOCIAL STUDIES - Paper - I
(English Medium)**

PART - B

Class : X]

(Max. Marks : 15)

[Time : $\frac{1}{2}$ Hr.

I. Choose the correct answer from the following four choices and

write the answer in the brackets given below.

20 x $\frac{1}{2}$ = 10

1. The place in between two rivers []

- A) Terai B) Dune C) Range D) Doab

2. The highest place in Eastern Ghats []

- A) Anaimudi B) Dodabetta
C) Aroma Hill D) Velikonda

3. "Our teachers see us with affection and told lessons very nice." These sentences are describing about []


- A) School experience B) Quality of teachers
C) Interest of students D) All of these

4. With the sufficient primary health facilities and education facilities these will be reduce []

- A) Life expectancy B) Infant mortality
C) National income D) Unemployment

5. The present fertility percentage in India []

- A) 2.7 B) 5.6 C) 1.9 D) 3.8

6.  What is the peak showed here []

- A) Nanga Prabhat B) Guru Sikar
C) Gadvik Austin D) Mt. Everest

[Turn Over

D 016 (A)

2

7. A financial year starts in these month []
A) May B) March C) April D) February
8. According to 2011 population census, what is highest density of population district in Navyandhra Pradesh []
A) Krishna B) West Godavari
C) Srikakulam D) Kurnool
9. In North India, some proportion of rainfall occurring through cyclones and depression are causing by these sea []
A) Arabian Sea B) Bay of Bengal
C) Mediterrean Sea D) Indian Ocean
10. 'Women who are working outside of home' haven these factors []
A) Independence B) Self confidence
C) Economic strength D) All of these
11. According to 2001 population census these no. crores people migrated []
A) 29.9 B) 30.7 C) 25.9 D) 13.8
12. In 2009, the region of sundarban helter skelter by the cause of []
A) Bola B) Aila C) Hud-Hud D) Laila
13. Fords motors company belong to []
A) France B) Germany C) America D) Australia
14. The main God to Jalasindhi Aadivasis []
A) Kalo rano B) Indi Raja C) Kajol D) Rani Panto

[Contd ... 3rd

D 016 (A)

3

15. 'A region with fixed borders' called []
A) Revenue Village B) Hamlet
C) Town D) Gudem
16. According to survey of National Nutrition Institute, the children whose age in between 1 - 5 years in total 7000, the percentage of children are with low weight. []
A) 45% B) 41% C) 21% D) 53%
17. The total members of World Trade Organisation []
A) 125 B) 135 C) 150 D) 145
18. In 2009 - 10 the rate of urban people poverty in SCS / STS []
A) $\frac{1}{3}$ B) $\frac{1}{6}$ C) $\frac{1}{2}$ D) $\frac{3}{4}$
19. What is main cause for men migration []
A) Employment B) Marriage
C) Education D) Health
20. If we use chemical fertilisers and pesticides highly results []
A) Crops will grown well B) Expenditure increase
C) Increase debts D) Decrease land fertility

II. Fill in the blanks.

$$5 \times \frac{1}{2} = 2\frac{1}{2}$$

21. _____ is most important for lively hood on the earth.
22. The main aim for the establishment of Kudumkulam Nuclear Power Plant _____
23. The term of "Greeshmam" will come in _____ months according english calendar.

[Turn Over

D 016 (A)

4

24. _____ report described imbalance development in between regions due to timed migrations.

25. Through internet, throughout world, it is easy and very cheap to send _____ immediately.

III. Match the following.

$$5 \times \frac{1}{2} = 2\frac{1}{2}$$

Group - A

Group - B

- | | | |
|-----------------|----------|--------------------------------------|
| 26. Sandoor | [] | A) Very big slum |
| 27. Mahanadi | [] | B) The huts of sugar harvest labours |
| 28. Dharavi | [] | C) Sihava |
| 29. Kopis | [] | D) Egypt |
| 30. Arab Spring | [] | E) Manganese |